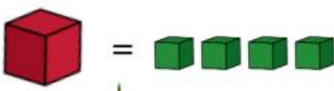






### Challenge 1







Amir says,  
 The apple is heavier than the peach, because it weighs 4 cubes.

Teddy says,  
 The apple and the peach weigh the same.

Who do you agree with?  
Explain why.

-

---

---

---

---

---

---


---

---

---

---

### Challenge 2



How many cubes does the teddy bear weigh?  
Explain how you know.

-

---

---

---

---

---

---

---

---

---

---