

This week we have been revising some of the key concepts based on number and place value, which are essential skills from year 1. Please print and help you child complete this sheet – keep them at home and you can upload them onto Google Classroom, when it is fully functional again – thank you for your patience. Thank you, Mr Allaway and Mr Hirani.

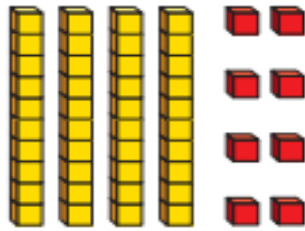
Write the numerals in words.

- a) 12 _____
- b) 13 _____
- c) 15 _____
- d) 18 _____
- e) 20 _____

Complete the number sentences.

- a) 1 ten and 8 ones =
- b) = 2 tens and 5 ones
- c) 41 = tens and one
- d) 37 ones = tens and ones
- e) 2 tens and 10 ones =

What number is shown?




There are tens and ones.

The number shown is

Eva and Jack are making the same number.

Eva's number has these tens.



Jack's number has nine ones.

What number are Eva and Jack making?

Fill in the red boxes.

1		3			6	7			<input style="border: 2px solid red;" type="text"/>
	<input style="border: 2px solid red;" type="text"/>				16				
		23				<input style="border: 2px solid red;" type="text"/>			
31				35			38		
	<input style="border: 2px solid red;" type="text"/>					47			50

Fill the gaps



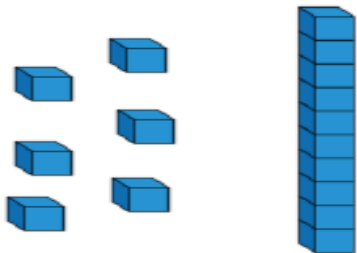
<

□

□

□

Jack says he has 61
Is he correct?



Explain your reasoning.

Annie counts how many muffins she has.



I have 35 muffins.



Do you agree with Annie?

Explain your answer.