



# Suki Squirrel's Acorn Hunt

Can you help Suki Squirrel find out how many acorns she has each time 1 more is added?

Draw 1 More Acorn

--	--	--	--	--

0 and 1 more is

--

				
---	--	--	--	--




1 and 1 more is

--

				
---	---	--	--	--





2 and 1 more is

--

				
--	--	--	--	--

3 and 1 more is

--

				
---	---	---	--	--

4 and 1 more is

--

