

We have been continuing our learning based on our addition and subtraction unit. Please complete this sheet, fold it and stick it in your child's homework book. Thank you,

2 Continue the patterns.

<p>a</p> $14 = 20 - 6$ $14 = 19 - \underline{\quad}$ $14 = \underline{\quad} - 4$ $14 = 17 - \underline{\quad}$ $14 = \underline{\quad} - 2$	<p>b</p> $12 = 7 + 5$ $12 = \underline{\quad} + 4$ $12 = 9 + \underline{\quad}$ $12 = \underline{\quad} + 2$ $12 = 11 + \underline{\quad}$
--	--

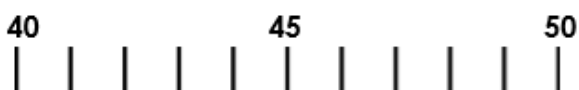
2 Continue the patterns.

<p>a</p> $15 = \underline{\quad} - 4$ $15 = 18 - \underline{\quad}$ $15 = \underline{\quad} - 2$ $15 = 16 - \underline{\quad}$ $15 = \underline{\quad} - 0$	<p>b</p> $14 = 9 + \underline{\quad}$ $14 = \underline{\quad} + 4$ $14 = 11 + \underline{\quad}$ $14 = \underline{\quad} + 2$ $14 = 13 + \underline{\quad}$
---	---

4b. Ava thinks she has completed her calculations correctly. Is she correct? Explain why.



$$44 - 4 = 48$$





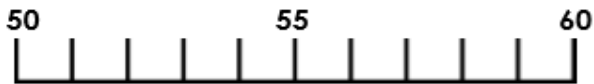
GLUE OVER THIS SENTENCE AND STICK THIS SHEET IN YOUR CHILD'S HOMEWORK BOOK.

5a. Which calculation is the odd one out and why?

$$54 + 4 = 58$$

$$54 - 4 = 58$$

$$53 + 5 = 58$$

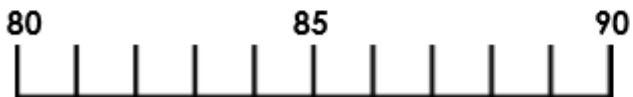


R

6a. Insert the correct symbols into the boxes.

A. $89 \square 4 = 85$

B. $84 \square 5 = 89$

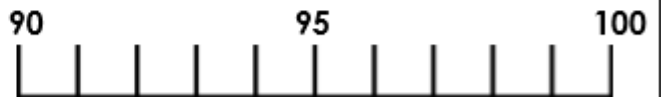


PS

6b. Insert the correct symbols into the boxes.

A. $97 \square 4 = 93$

B. $91 \square 5 = 96$



PS

6a. Which number is left out?



My number is 10 less than fifty four.

My number is 10 more than sixty three.



My number is 10 less than twenty three.

13

44

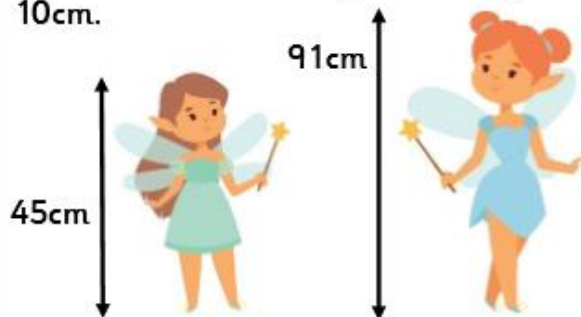
57

73



PS

4b. A wizard sprinkles magic dust on some fairies. Each fairy shrinks by 10cm.



How tall is each fairy now?



PS