
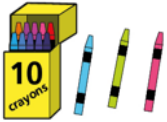
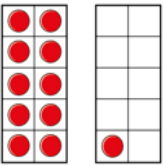


This week we have been learning to know the place value of number to 20 using Base Ten and part -whole model.

1 a) Complete the table.

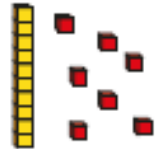
Picture	Numeral	Word
	20	
		
		
	12	

b) Match the number sentences to the picture representation of Base Ten.

1 ten and 7 ones



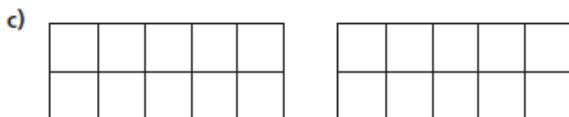
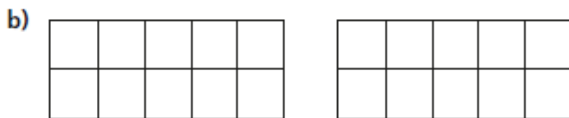
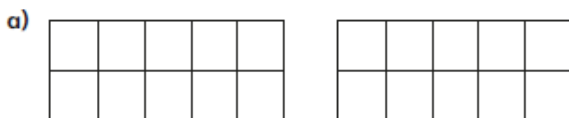
1 ten and 1 one



1 ten and 8 ones

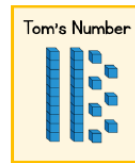
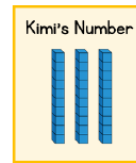


2 Draw counters to show 14 in three different ways.



d) solve the problem and explain reasoning for your answer.

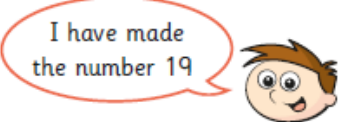
Kimi and Tom have each made a number.

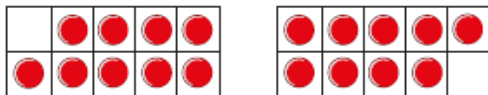


Who has made the smallest number?

Circle your answer.

Kimi Tom They have made the same number.

3 



Has Teddy made the number 19?