

We have been continuing our learning involving money and learning about making totals. Please complete this sheet, fold it and stick it in your child's homework book. Thank you.

Jamie selects four of these coins.



He can use the coins more than once.

What total could he make?

What is the lowest total?

What is the greatest total?

Dan thinks he has £13



Is he correct?
Explain your answer.

Mo has the following coins.



He thinks he has 51p.

Explain his mistake.

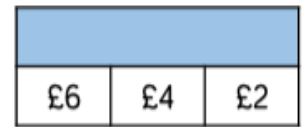
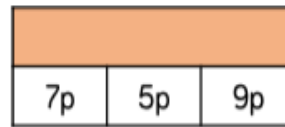
Fill in the gaps to make the statements correct.

- £10 + £5 + 50p = £___ and ___p
- £20 + £2 + 10p + 10p + 2p = £___ and ___p
- £5 + £___ + 50p + 20p + 20p + 1p = £10 and ___p

Complete the table.

Pounds	Pence	Total
£4	25p	£__ and __p
£2		£2 and 40p
	65p	£20 and 65 pence
		£15 and 20p
	55 pence	

Complete the bar models.



Jackson buys bread and milk.



49p



30p

How much does he spend?

**Ghost Train:
90p**

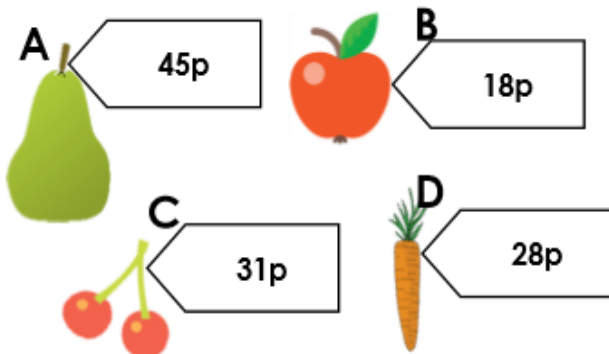
Emily finds a 20p coin.

She puts it with her other three 20p coins.

Does Emily have enough to ride the ghost train?

Explain why.

6a. Hassan spends 73p. Which 2 items does he buy?



Which combination of coins could he use to pay 73p?



PS
