


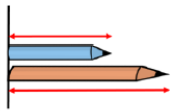
Use the words **taller** and **shorter** in the sentence stems to compare the height of the man and the boy.

The man is  than the boy.

The boy is  than the man.



Use the words **longer** and **shorter** in the sentence stems to compare the length of the blue pencil and the orange pencil.



The blue pencil is  than the orange pencil.

The orange pencil is  than the blue pencil.

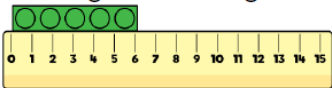
Which pencil is the longest? Which pencil is the shortest?

Compare the vehicles using the words to help you.



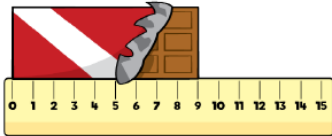
length height  
longer same  
taller shorter

How long is the building block?



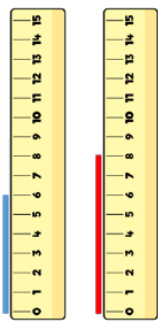
The building block is  cm.

What is the length of the chocolate bar?



The chocolate bar is  cm.

Which straw is the tallest?



The blue straw is  cm tall.

The red straw is  cm tall.

The  straw is the tallest.

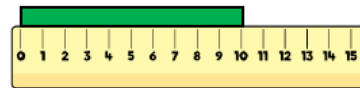
The  straw is the shortest.

Eva, Dexter and Rosie are comparing ribbons that they have. Unfortunately, Dexter has lost his ribbon.

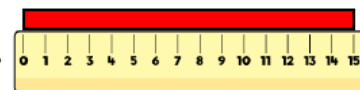
He says,



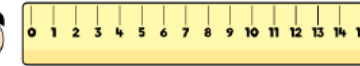
My ribbon is shorter than Rosie's, but longer than Eva's.



Eva



Rosie



Dexter

How long could Dexter's ribbon be?

**Think about these questions:**

What do the numbers on the ruler mean? (1 cm etc.)

What could you use to measure how tall you are? Is it easier to measure someone lying down or standing up?

Where should we place the object to start measuring it?

Have a look around your house and see what else you can measure!

Enjoy measuring!!!