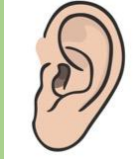


To be able to follow simple rules and expectations

Date: Friday 27th

1. Good listening



2. Good sitting



3. Good looking



4. Wait for your turn to speak/ answer



5. Hands to your self



Word bank

Recap

Date: Friday






1

2

3

4

5


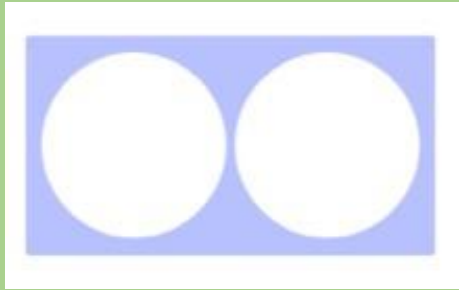
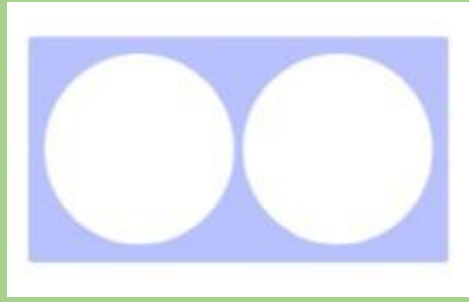


Match the dots to the correct number

Word bank
Altogether
Match
numbers

Recap: LO To use resources to add simple amounts and represent our sums

Date: Friday



1

2

3

4

5

Help me make the number 4


What 2 numbers should we add to make 4?

How do we write that a number sentence?

Word bank
Altogether
Match
numbers

Recap: LO To use resources to add simple amounts and represent our sums

Date: Friday



1
2
3
4
5

Word bank
Altogether
Match
numbers










What number have I made here?

How do you know?

How can I write a matching number sentence?

LO To use resources to add simple amounts and represent our sums

Date: Friday



$$2 + 1 =$$

Word bank
Altogether
Match
Numbers
counters











Recap how we used 5 frame to represent a number sum and find the answer

Model first

Now you try!

LO To use resources to add simple amounts and represent our sums

Date: Friday














$$1 + 3 =$$

Word bank
Altogether
Match
Numbers
counters

Now you try with your partner!

LO To use resources to add simple amounts and represent our sums

Date: Friday













$$2 + 3 =$$

Now you try with your partner!

Word bank
Altogether
Match
Numbers
counters

LO To use resources to add simple amounts and represent our sums

Date: Friday








$$5 + 0 =$$

Word bank
Altogether
Match
Numbers
counters






Now you try with your partner!

LO To use resources to add simple amounts and represent our sums

Date: Friday



$$2 + 2 =$$



Word bank
Altogether
Match
Numbers
counters

Now you try with your partner!